



# Rechne richtig aus!



$34 + \underline{\quad} = 100$

55



$45 + \underline{\quad} = 100$

47




$71 + \underline{\quad} = 100$

89




$82 + \underline{\quad} = 100$

77




$53 + \underline{\quad} = 100$

66



$11 + \underline{\quad} = 100$

51




$69 + \underline{\quad} = 100$

68




$23 + \underline{\quad} = 100$

29



$32 + \underline{\quad} = 100$






31



$49 + \underline{\quad} = 100$

18

Kerstin Pich

Lösung	
	
	
	
	
	
	
	
	
	
	
Kerstin Pich	