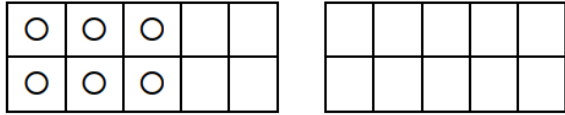
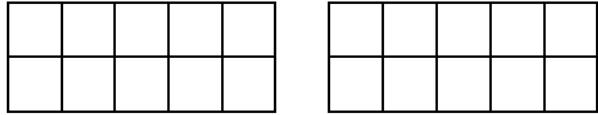


Über den Zehner

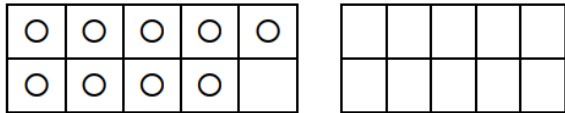
2



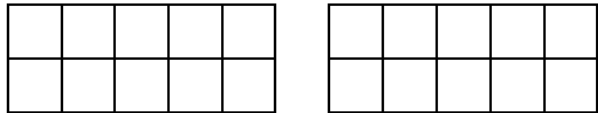
$$6 + 8 =$$
$$6 + _ + _ =$$



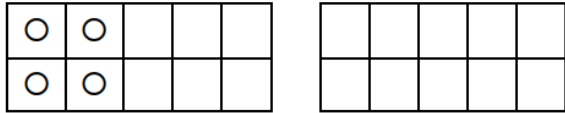
$$9 + 4 =$$
$$9 + _ + _ =$$



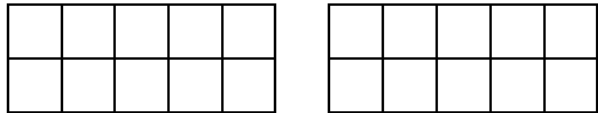
$$9 + 4 =$$
$$9 + _ + _ =$$



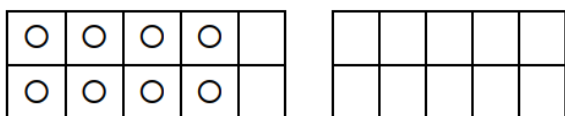
$$6 + 5 =$$
$$6 + _ + _ =$$



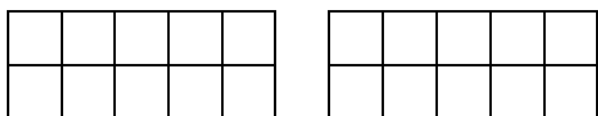
$$4 + 8 =$$
$$4 + _ + _ =$$



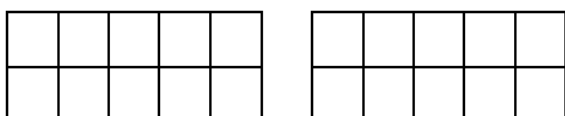
$$4 + 7 =$$
$$4 + _ + _ =$$



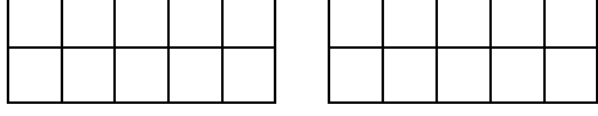
$$8 + 5 =$$
$$8 + _ + _ =$$



$$6 + 9 =$$
$$6 + _ + _ =$$



$$9 + 7 =$$
$$9 + _ + _ =$$



$$8 + 7 =$$
$$8 + _ + _ =$$