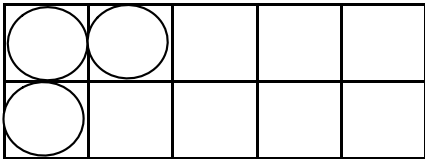
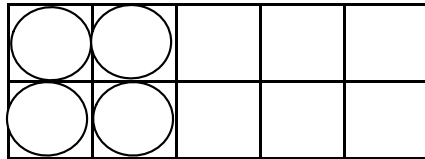


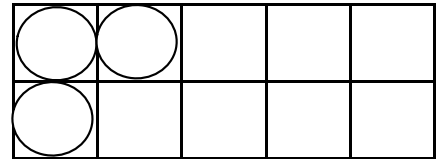
Name: _____



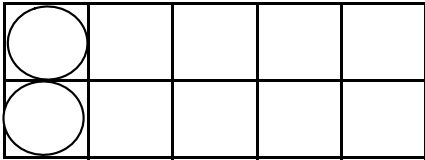
$$3 + 0 = \square$$



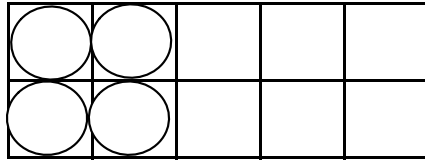
$$0 + 2 = \square$$



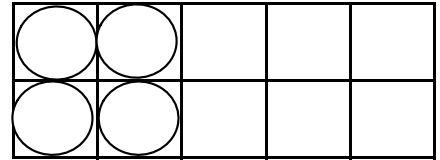
$$3 - 0 = \square$$



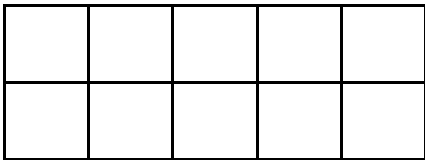
$$2 - 0 = \square$$



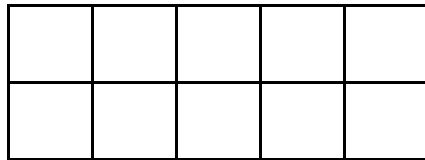
$$0 + 1 = \square$$



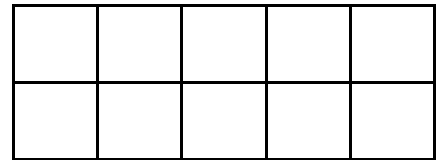
$$4 - 0 = \square$$



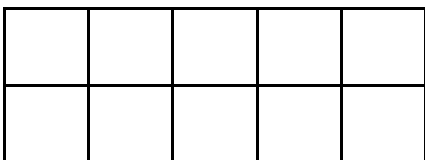
$$4 - 0 = \square$$



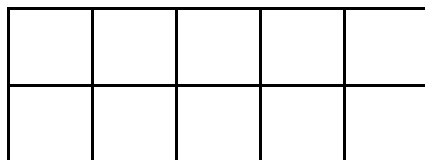
$$3 + 0 = \square$$



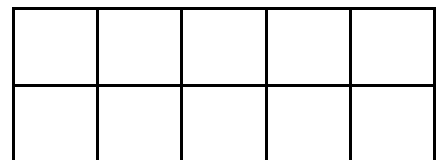
$$2 + 0 = \square$$



$$0 + 3 = \square$$



$$0 + 1 = \square$$



$$4 + 0 = \square$$

$$\begin{array}{l} 2 + 0 = \square \\ 3 + 1 = \square \\ 1 + 2 = \square \\ 4 + 0 = \square \\ 3 + 0 = \square \end{array}$$

$$\begin{array}{l} 1 - 0 = \square \\ 3 - 2 = \square \\ 4 - 1 = \square \\ 2 - 0 = \square \\ 4 - 0 = \square \end{array}$$

$$\begin{array}{l} 2 + 2 = \square \\ 3 - 0 = \square \\ 4 - 3 = \square \\ 1 + 0 = \square \\ 3 - 1 = \square \end{array}$$