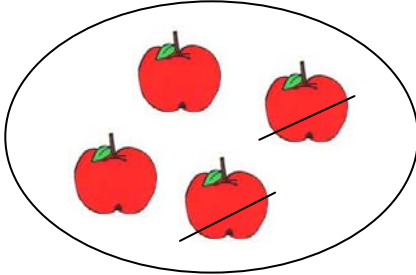



Name: _____

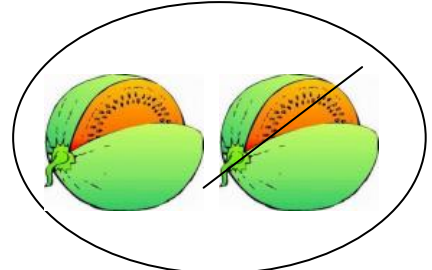
Wegnehmen



$$4 - 2 = \underline{\quad}$$




$$3 - 2 = \underline{\quad}$$




$$2 - 1 = \underline{\quad}$$



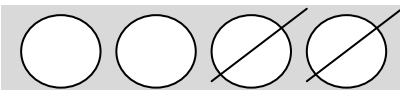
$$3 - 1 = \underline{\quad}$$




$$2 - 0 = \underline{\quad}$$



$$4 - 3 = \underline{\quad}$$



$$\underline{\quad} - \underline{\quad} = \underline{\quad}$$



$$\underline{\quad} - \underline{\quad} = \underline{\quad}$$



$$\underline{\quad} - \underline{\quad} = \underline{\quad}$$



$$4 - 1 = \underline{\quad}$$

$$3 - 1 = \underline{\quad}$$

$$2 - 2 = \underline{\quad}$$

$$3 - 2 = \underline{\quad}$$

$$2 - 1 = \underline{\quad}$$

$$4 - 2 = \underline{\quad}$$

$$4 - 0 = \underline{\quad}$$

$$4 - 3 = \underline{\quad}$$

$$1 - 1 = \underline{\quad}$$