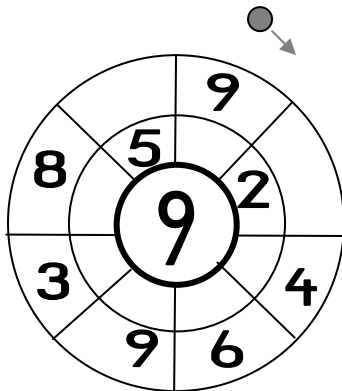


Name: _____

Rechenräder

(bis 9)

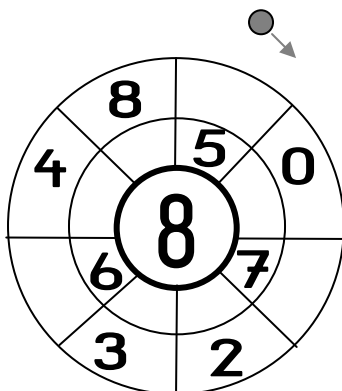


Rechne so in deinem Heft:

$$9 + _ = 9$$

$$_ + 2 = 9$$

$$4 + _ = 9$$

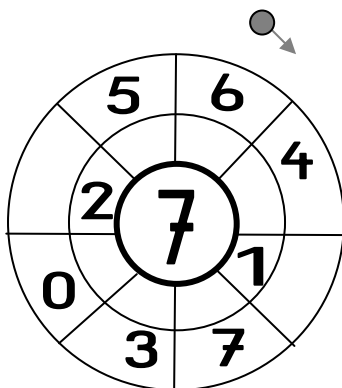


Rechne so in deinem Heft:

$$_ + 5 = 8$$

$$0 + _ = 8$$

$$_ + 7 = 8$$



Rechne so in deinem Heft:

$$6 + _ = 7$$

$$4 + _ = 7$$

$$_ + 1 = 7$$