
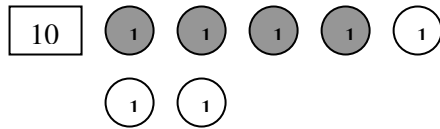


1. Zähle und Rechne!

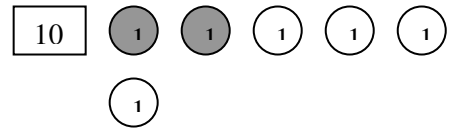
Name: _____



$12 + 2 = \underline{\quad}$



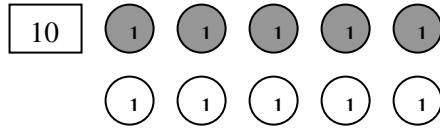
$14 + \underline{\quad} = \underline{\quad}$



$\underline{\quad} + \underline{\quad} = \underline{\quad}$



$\underline{\quad} + \underline{\quad} = \underline{\quad}$



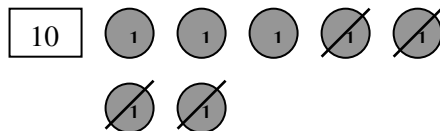
$\underline{\quad} + \underline{\quad} = \underline{\quad}$



$\underline{\quad} + \underline{\quad} = \underline{\quad}$



$13 - 2 = \underline{\quad}$



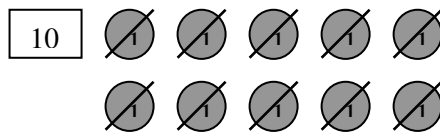
$17 - \underline{\quad} = \underline{\quad}$



$\underline{\quad} - \underline{\quad} = \underline{\quad}$



$\underline{\quad} - \underline{\quad} = \underline{\quad}$



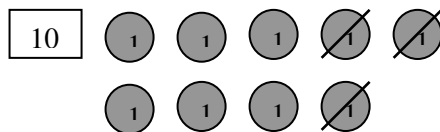
$\underline{\quad} + \underline{\quad} = \underline{\quad}$



$\underline{\quad} - \underline{\quad} = \underline{\quad}$



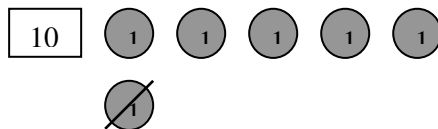
$\underline{\quad} + \underline{\quad} = \underline{\quad}$



$\underline{\quad} - \underline{\quad} = \underline{\quad}$



$\underline{\quad} + \underline{\quad} = \underline{\quad}$



$\underline{\quad} - \underline{\quad} = \underline{\quad}$

